










NAME _____

3d Shapes



Write the amount of faces, edges and vertices for each 3d shape.

CYLINDER  Faces _____ Edges _____ Vertices _____	CONE  _____	CUBE  Faces _____ Edges _____ Vertices _____
SPHERE  Faces _____ Edges _____ Vertices _____	CUBOID  Faces _____ Edges _____ Vertices _____	PYRAMID  Faces _____ Edges _____ Vertices _____
TRIANGULAR PRISM  Faces _____ Edges _____ Vertices _____	PENTAGONAL PRISM  Faces _____ Edges _____ Vertices _____	HEXAGONAL PRISM  Faces _____ Edges _____ Vertices _____