

Name: _____

Date: _____

SHARING TASKS 1

The following exercises are simple sharing tasks of a number of things. The sharing tasks will also involve you knowing some fraction language.



1. QUESTION

The spaces between the cupcakes represent those that are eaten. Name the eaten and uneaten portion as a fraction.

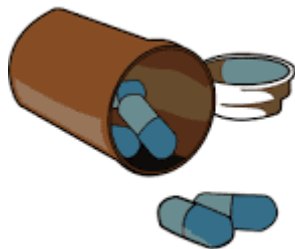


a) _____ of cupcakes are eaten.

b) _____ of cupcakes are not eaten.

2. QUESTION

Grandmother has 100 tablets in a bottle. She takes 2 tablets a day. At the end of the month, how much tablets would remain in the bottle?



more than $\frac{1}{4}$

less than $\frac{1}{2}$

more than a $\frac{1}{2}$

less than $\frac{3}{4}$

Name: _____

Date: _____

3. QUESTION

Write the fraction that represents the amount of bubble gums that are green.



Answer = _____

4. QUESTION


What fraction of this group are boys?



Answer = _____

5. QUESTION

How many shells are blue?



Answer = _____ shells are blue.

Name: _____

Date: _____

6. QUESTION

Select the fraction that shows the amount of men at work?



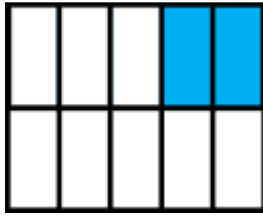
- one-sixth of the men are at work
- one-half of the men are at work
- one-quarter of the men are at work
- two-thirds of the men are at work

Name: _____

Date: _____

7. QUESTION

Write the fraction which represents the shaded part.



Answer = _____

8. QUESTION


Write the fraction for the white portion.



Answer = _____

9. QUESTION

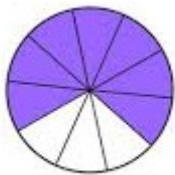
What fraction of the pizza was eaten?



Answer = _____

10. QUESTION

What fraction of the circle is shaded?



Answer = _____