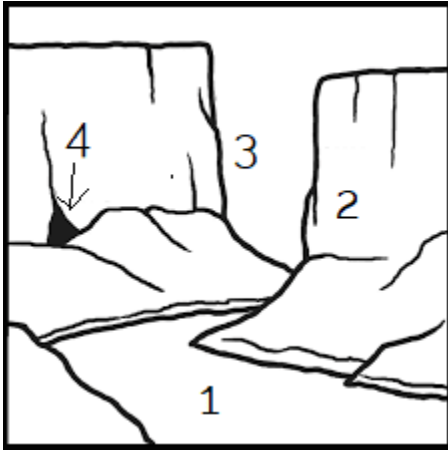


# LANDFORMS 3

Answer the following questions.

## 1. QUESTION

Label the numbers on the picture below. Type your answer in the space provided below.



1.

---

2.

---

3.


---

4.

---

## 2. QUESTION

Label the numbers with the names of the landform it represents in the picture below.



1.

---

2.

---

3.

---

4.

---

## 3. QUESTION

Name the image below.




isthmus

glacier

volcano

4. QUESTION

Name the image below.



isthmus

peninsula

strait