


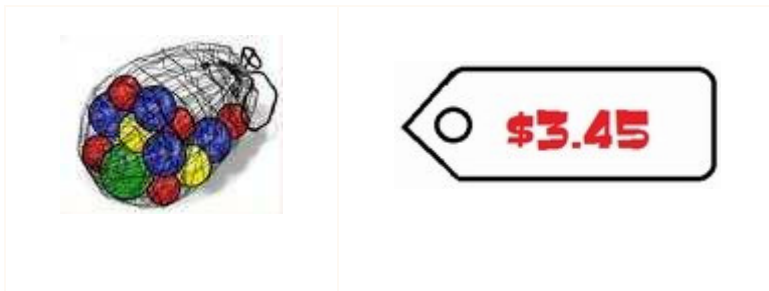
BASIC MONEY SKILLS 3

The following exercises focuses on identifying the equivalence of coins and making change.

You have:




1. You spend:



How much change? _____

2. You have:



3. You spend:


How much change? _____



4. You have:




You spend:




How much change? _____

5. You have:



6. You spend:



How much change? _____

7. You have:



You spend:

A pizza with four slices, each with different toppings: pepperoni, mushrooms, olives, and vegetables.	<p>\$6.00 A SLICE</p>
---	--

What is your change? _____

8. You have:



You spend:

A jar of Jif Creamy Peanut Butter, with a red lid and a label that says 'Jif CREAMY PEANUT BUTTER'.	A price tag with a black border and a white background, showing the price '\$7.25' in red.
---	--

How much change? _____