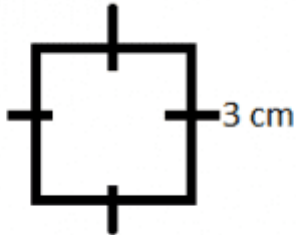


MATHEMATICS: AREA AND PERIMETER 2

Answer all the questions.

1. QUESTION

What is the area of the square?




Answer = _____ cm²

2. QUESTION

What is the area of the shape below?

Base = 8 cm

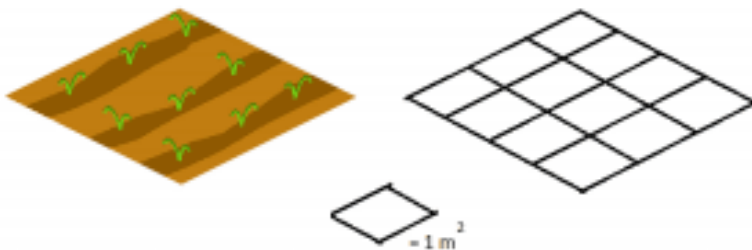
Height = 14 cm



Answer = _____ cm²

3. QUESTION

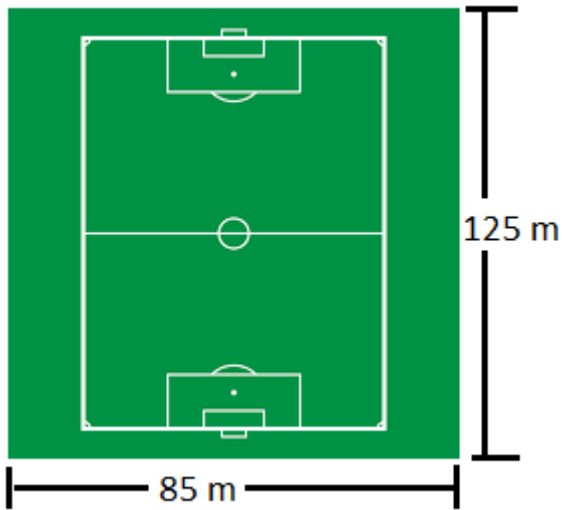
What is the area of the garden plot below?



Answer = _____ m²

4. QUESTION

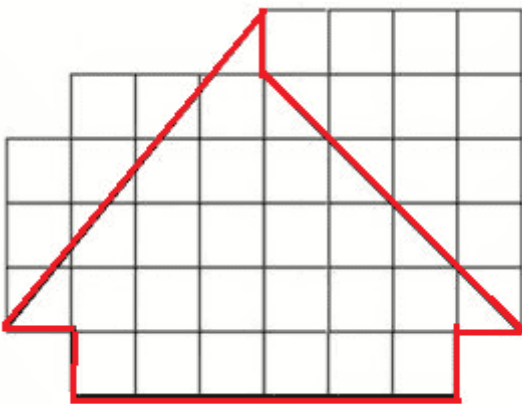
A play field is shown below. If a pole with a light is to be placed at every 10 m around the field, how many poles will be placed around the playfield?



Answer = _____ poles

5. QUESTION

The shape below looks like the top of a house. Calculate the area for the shape drawn in the grid below.



Complete the guide below before you answer the

question.

Amount of full squares =

Amount of half squares = = full squares

Amount of other shapes that can make squares = = squares

Answer= The area is cm²