


# 3-D SHAPES

Here are some 3 dimensional shapes you should know.

Sphere




Cube



Cylinder





Pyramid



Cone



Cuboid




Triangular Prism

Practice

1. QUESTION

Name the 3d shapes below.

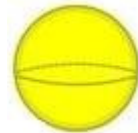
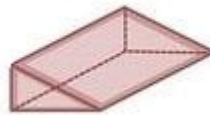
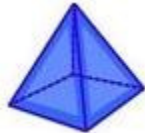
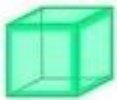


\_\_\_\_\_

\_\_\_\_\_

\_\_\_\_\_

\_\_\_\_\_



\_\_\_\_\_

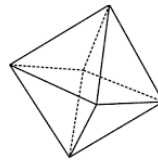
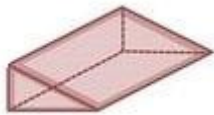
\_\_\_\_\_

\_\_\_\_\_

\_\_\_\_\_

2. QUESTION

Which is NOT a polyhedron?



--	--	--	--	--

Triangular prism

Cone

octahedron

cube