
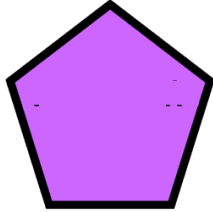


2-D SHAPES 2


Review shapes.

Name the following 2D shapes.


























4. Which shape has three sides?

parallelogram

square

triangle

rectangle

5. Which shape has 4 sides and opposite sides parallel?

rhombus

triangle

trapezium

parallelogram

6. Which shape is the fence?



square

rectangle

rhombus

trapezium

7. Which shape is this umbrella?



- nonagon octagon pentagon hexagon

8. Which shape is this clock?



- circle rhombus rectangle square




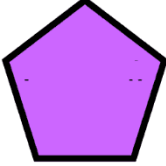


9. Which shape has four equal sides?

- triangle square rectangle rhombus

10. How are rectangles, squares, and triangles alike?

- They have equal sides.
 They all have angles.
 They have curves.
 They are all made up of line segments.

11. Name and type the number of sides for these polygons.

	Name – Side -		Name – Side -
	Name – Side -		Name – Side -
	Name – Side -		Name – Side -

12. What do a rectangle and a square have in common?

- Both have 4 sides.
- Opposite sides are equal and parallel.
- Each angle is a 90° or a right angle.
- Opposite angles are equal.